

# Telangana State Commissioner and Director of School Education

## Notations :

- 1.Options shown in green color and with ✓ icon are correct.
- 2.Options shown in red color and with ✗ icon are incorrect.

<b>Question Paper Name :</b>	English Medium with Telugu 01st Jun 2023 Shift 2
<b>Subject Name :</b>	English Medium with Telugu
<b>Creation Date :</b>	2023-06-01 17:35:29
<b>Duration :</b>	120
<b>Total Marks :</b>	100
<b>Display Marks:</b>	Yes
<b>Share Answer Key With Delivery Engine :</b>	Yes
<b>Calculator :</b>	None
<b>Magnifying Glass Required? :</b>	No
<b>Ruler Required? :</b>	No
<b>Eraser Required? :</b>	No
<b>Scratch Pad Required? :</b>	No
<b>Rough Sketch/Notepad Required? :</b>	No
<b>Protractor Required? :</b>	No
<b>Show Watermark on Console? :</b>	Yes
<b>Highlighter :</b>	No
<b>Auto Save on Console?</b>	Yes
<b>Change Font Color :</b>	No
<b>Change Background Color :</b>	No
<b>Change Theme :</b>	No
<b>Help Button :</b>	No
<b>Show Reports :</b>	No
<b>Show Progress Bar :</b>	No

## English Medium with Telugu

<b>Group Number :</b>	1
<b>Group Id :</b>	1340075
<b>Group Maximum Duration :</b>	0
<b>Group Minimum Duration :</b>	120
<b>Show Attended Group? :</b>	No
<b>Edit Attended Group? :</b>	No
<b>Break time :</b>	0
<b>Group Marks :</b>	100
<b>Is this Group for Examiner? :</b>	No

Examiner permission :  
Show Progress Bar? :

Cant View  
No

## General Knowledge and Teaching Aptitude

Section Id : 13400729  
Section Number : 1  
Section type : Online  
Mandatory or Optional : Mandatory  
Number of Questions : 10  
Number of Questions to be attempted : 10  
Section Marks : 10  
Enable Mark as Answered Mark for Review and Clear Response : Yes  
Maximum Instruction Time : 0  
Sub-Section Number : 1  
Sub-Section Id : 13400732  
Question Shuffling Allowed : Yes  
Is Section Default? : null

Question Number : 1 Question Id : 134007404 Question Type : MCQ Option Shuffling : No Is Question Mandatory : No Calculator : None Response Time : N.A Think Time : N.A Minimum Instruction Time : 0 Correct Marks : 1 Wrong Marks : 0

In which year did India's Men's National Cricket Team play its first International Test Match ?

Options :

- 1. ✘ 1952
- 2. ✘ 1947
- 3. ✔ 1932
- 4. ✘ 1936

Question Number : 2 Question Id : 134007405 Question Type : MCQ Option Shuffling : No Is Question Mandatory : No Calculator : None Response Time : N.A Think Time : N.A Minimum Instruction Time : 0 Correct Marks : 1 Wrong Marks : 0

Earthquake struck this country in February 2023 that killed about 50,000 people

Options :

1. ✓ Turkey

2. ✘ Iraq

3. ✘ Iran

4. ✘ Sudan

**Question Number : 3 Question Id : 134007406 Question Type : MCQ Option Shuffling : No Is Question Mandatory : No Calculator : None Response Time : N.A Think Time : N.A Minimum Instruction Time : 0 Correct Marks : 1 Wrong Marks : 0**

Femina Miss India 2023 winner is

Options :

1. ✘ Megan Edward

2. ✓ Nandini Gupta

3. ✘ Apoorva Chawan

4. ✘ Aditi Sherma

**Question Number : 4 Question Id : 134007407 Question Type : MCQ Option Shuffling : No Is Question Mandatory : No Calculator : None Response Time : N.A Think Time : N.A Minimum Instruction Time : 0 Correct Marks : 1 Wrong Marks : 0**

One of the following Scientific Institutions is located in Telangana

Options :

1. ✘ Central Drug Research Institute

2. ✓ Centre for Cellular and Molecular Biology

3. ✘ Institute of Nano Science and Technology

Indian Institute of Integrative Medicine

4. ✘

**Question Number : 5 Question Id : 134007408 Question Type : MCQ Option Shuffling : No Is Question Mandatory : No Calculator : None Response Time : N.A Think Time : N.A Minimum Instruction Time : 0 Correct Marks : 1 Wrong Marks : 0**

The country that is smaller than India in terms of area among the following

Options :

1. ✘ Brazil
2. ✘ Canada
3. ✘ USA
4. ✔ Argentina

**Question Number : 6 Question Id : 134007409 Question Type : MCQ Option Shuffling : No Is Question Mandatory : No Calculator : None Response Time : N.A Think Time : N.A Minimum Instruction Time : 0 Correct Marks : 1 Wrong Marks : 0**

As a teacher you would

Options :

1. ✔ Encourage all students to pursue the area of their interest as per their abilities
2. ✘ Encourage only those students who are academically very good
3. ✘ Encourage only those students who are good in sports
4. ✘ Encourage only those students who are good in art and craft

**Question Number : 7 Question Id : 134007410 Question Type : MCQ Option Shuffling : No Is Question Mandatory : No Calculator : None Response Time : N.A Think Time : N.A Minimum Instruction Time : 0 Correct Marks : 1 Wrong Marks : 0**

Knowledge of which of these is important for a teacher

- A. ICT
- B. Child Development
- C. Educational Policies

Options :

- 1. ✓ A, B and C
- 2. ✗ A and B only
- 3. ✗ B and C only
- 4. ✗ A and C only

**Question Number : 8 Question Id : 134007411 Question Type : MCQ Option Shuffling : No Is Question Mandatory : No Calculator : None Response Time : N.A Think Time : N.A Minimum Instruction Time : 0 Correct Marks : 1 Wrong Marks : 0**

Choose the correct statement relating to Continuous Professional Development of teachers

Options :

- 1. ✗ Continuous Professional Development is not important for pre-primary level teachers
- 2. ✓ Continuous Professional Development is important for all levels of teachers
- 3. ✗ Continuous Professional Development cannot bring about improvement in ICT skills of teachers
- 4. ✗ Elementary level teachers need Continuous Professional Development only in subject knowledge

**Question Number : 9 Question Id : 134007412 Question Type : MCQ Option Shuffling : No Is Question Mandatory : No Calculator : None Response Time : N.A Think Time : N.A Minimum Instruction Time : 0 Correct Marks : 1 Wrong Marks : 0**

Any Teacher Education Institution should be recognized by this organization to conduct teacher education programmes

Options :

1. ✘ RIE
2. ✘ NCERT
3. ✔ NCTE
4. ✘ CBSE

Question Number : 10 Question Id : 134007413 Question Type : MCQ Option Shuffling : No Is Question Mandatory : No Calculator : None Response Time : N.A Think Time : N.A Minimum Instruction Time : 0 Correct Marks : 1 Wrong Marks : 0

Intolerance of a teacher towards which of the following students is **NOT** acceptable

- A. Those who do not learn to read fast
- B. Those who have physical disability
- C. Those who keep disturbing the class

Options :

1. ✘ A only
2. ✘ B only
3. ✘ C only
4. ✔ A, B and C

## General English

Section Id : 13400730  
Section Number : 2  
Section type : Online

<b>Mandatory or Optional :</b>	Mandatory
<b>Number of Questions :</b>	16
<b>Number of Questions to be attempted :</b>	16
<b>Section Marks :</b>	20
<b>Enable Mark as Answered Mark for Review and Clear Response :</b>	Yes
<b>Maximum Instruction Time :</b>	0
<b>Sub-Section Number :</b>	1
<b>Sub-Section Id :</b>	13400733
<b>Question Shuffling Allowed :</b>	Yes
<b>Is Section Default? :</b>	null

**Question Number : 11 Question Id : 134007414 Question Type : MCQ Option Shuffling : No Is Question Mandatory : No Calculator : None Response Time : N.A Think Time : N.A Minimum Instruction Time : 0 Correct Marks : 1 Wrong Marks : 0**

He still lives in that small house – the underlined word is a/an

**Options :**

1. ✓ Adverb
2. ✗ Adjective
3. ✗ Determiner
4. ✗ Quantifier

**Question Number : 12 Question Id : 134007415 Question Type : MCQ Option Shuffling : No Is Question Mandatory : No Calculator : None Response Time : N.A Think Time : N.A Minimum Instruction Time : 0 Correct Marks : 1 Wrong Marks : 0**

No -----reasons were given. Choose the suitable word to complete the sentence.

**Options :**

1. ✗ farther
2. ✓ further
3. ✗ farthest

furthermost

4. ✘

**Question Number : 13 Question Id : 134007416 Question Type : MCQ Option Shuffling : No Is Question Mandatory : No Calculator : None Response Time : N.A Think Time : N.A Minimum Instruction Time : 0 Correct Marks : 1 Wrong Marks : 0**

Lead is heavier than any other metal. - this sentence can be rewritten as

**Options :**

Lead is one of the heaviest metals.

1. ✘

Lead is heavier than most other metals.

2. ✘

Lead is the heaviest metal.

3. ✔

No other metal is heaviest than lead.

4. ✘

**Question Number : 14 Question Id : 134007417 Question Type : MCQ Option Shuffling : No Is Question Mandatory : No Calculator : None Response Time : N.A Think Time : N.A Minimum Instruction Time : 0 Correct Marks : 1 Wrong Marks : 0**

Choose the correct sentence.

**Options :**

All who glitters is not gold.

1. ✘

All whose glitters is not gold.

2. ✘

All that glitters is not gold.

3. ✔

All those glitters is not gold.

4. ✘

**Question Number : 15 Question Id : 134007418 Question Type : MCQ Option Shuffling : No Is Question Mandatory : No Calculator : None Response Time : N.A Think Time : N.A Minimum Instruction Time : 0 Correct Marks : 1 Wrong Marks : 0**



He has handed her a cheque- this sentence can be rewritten as

Options :

1. ✘ A cheque has handed by her.
2. ✘ A cheque has been handed by her.
3. ✔ A cheque has been handed to her by him.
4. ✘ A cheque has been handed by her to him.

**Question Number : 16 Question Id : 134007419 Question Type : MCQ Option Shuffling : No Is Question Mandatory : No Calculator : None Response Time : N.A Think Time : N.A Minimum Instruction Time : 0 Correct Marks : 1 Wrong Marks : 0**

His -----coat needs ----- . Choose the correct answer to complete the sentence.

Options :

1. ✘ tatter, mend
2. ✘ tattered, mend
3. ✔ tattered, mending
4. ✘ Tattering, mending

**Question Number : 17 Question Id : 134007420 Question Type : MCQ Option Shuffling : No Is Question Mandatory : No Calculator : None Response Time : N.A Think Time : N.A Minimum Instruction Time : 0 Correct Marks : 1 Wrong Marks : 0**

The old man said to us "Where are you going tonight?"- This sentence can be rewritten as

Options :

1. ✘ The old man asked where were you going tonight.

2. ✘ The old man asked where we were going tonight.
3. ✔ The old man asked where we were going that night.
4. ✘ The old man asked where we had been going that night.

**Question Number : 18 Question Id : 134007421 Question Type : MCQ Option Shuffling : No Is Question Mandatory : No Calculator : None Response Time : N.A Think Time : N.A Minimum Instruction Time : 0 Correct Marks : 1 Wrong Marks : 0**

Let's go now, -----?- Choose the suitable question tag.

**Options :**

1. ✘ do we
2. ✘ should we
3. ✔ shall we
4. ✘ are we

**Question Number : 19 Question Id : 134007422 Question Type : MCQ Option Shuffling : No Is Question Mandatory : No Calculator : None Response Time : N.A Think Time : N.A Minimum Instruction Time : 0 Correct Marks : 1 Wrong Marks : 0**

I shall reach the office on time ----- choose the suitable answer to complete the sentence.

**Options :**

1. ✘ if the train was late
2. ✘ if the train was not late
3. ✘ if the train is late
4. ✔ unless the train is late

**Question Number : 20 Question Id : 134007423 Question Type : MCQ Option Shuffling : No Is Question Mandatory : No Calculator : None Response Time : N.A Think Time : N.A Minimum Instruction Time : 0 Correct Marks : 1 Wrong Marks : 0**

Identify the part of the sentence that has an error.

One of the most beautiful place/ I have visited recently/ is / the Golden Temple in Amritsar.

A

B

C

D

**Options :**

1.  A

2.  B

3.  C

4.  D

**Question Number : 21 Question Id : 134007424 Question Type : MCQ Option Shuffling : No Is Question Mandatory : No Calculator : None Response Time : N.A Think Time : N.A Minimum Instruction Time : 0 Correct Marks : 1 Wrong Marks : 0**

No sooner they saw the bus coming than they moved quickly. Choose the suitable answer to replace the underlined part .

**Options :**

1.  has they seen

2.  do they see

3.  had they seen

4.  have they seen

**Question Number : 22 Question Id : 134007425 Question Type : MCQ Option Shuffling : No Is Question Mandatory : No Calculator : None Response Time : N.A Think Time : N.A Minimum Instruction Time : 0 Correct Marks : 1 Wrong Marks : 0**

I am not going to ----- this nonsense. Choose the suitable answer to complete the sentence.

Options :

1. ✘ fall back on
2. ✘ run out of
3. ✘ drop in on
4. ✔ Put up with

**Question Number : 23 Question Id : 134007426 Question Type : MCQ Option Shuffling : No Is Question Mandatory : No Calculator : None Response Time : N.A Think Time : N.A Minimum Instruction Time : 0 Correct Marks : 1 Wrong Marks : 0**

The body of an adult insect is divided into three sections, ----- a head, a thorax and segmented abdomen.  
Choose the suitable answer to complete the sentence.

Options :

1. ✘ Include
2. ✘ includes
3. ✔ including
4. ✘ included

**Question Number : 24 Question Id : 134007427 Question Type : MCQ Option Shuffling : No Is Question Mandatory : No Calculator : None Response Time : N.A Think Time : N.A Minimum Instruction Time : 0 Correct Marks : 1 Wrong Marks : 0**

Flies require little food----- they are small. Choose the suitable answer to complete the sentence.

Options :

1. ✓ because
2. ✗ even though
3. ✗ whereas
4. ✗ despite

**Question Number : 25 Question Id : 134007428 Question Type : MCQ Option Shuffling : No Is Question Mandatory : No Calculator : None Response Time : N.A Think Time : N.A Minimum Instruction Time : 0 Correct Marks : 1 Wrong Marks : 0**

Where----- the car usually? Choose the suitable answer to complete the sentence.

**Options :**

1. ✗ did you parked
2. ✗ did you park
3. ✗ you parked
4. ✓ do you park

<b>Sub-Section Number :</b>	2
<b>Sub-Section Id :</b>	13400734
<b>Question Shuffling Allowed :</b>	Yes
<b>Is Section Default? :</b>	null

**Question Id : 134007429 Question Type : COMPREHENSION Sub Question Shuffling Allowed : Yes Group Comprehension Questions : No Question Pattern Type : NonMatrix Calculator : None Response Time : N.A Think Time : N.A Minimum Instruction Time : 0**

**Question Numbers : (26 to 30)**  
Question Label : Comprehension

Read the passage given below and answer the questions that follow.

Papaya is the healthiest fruit with a list of properties that is long and exhaustive. Mostly grown in the tropical regions of the world, papaya is generally considered a goldmine of nutrition, so much so that the famous explorer Christopher Columbus referred to it as the 'fruit of the angels'.

Papaya is not just known as a delicious fruit but is also known for its medicinal and nutritional values. It is considered a storehouse of natural fibres, carotene, vitamin C, and essential minerals which lower the level of cholesterol and prevent heart diseases. It contains an important digestive enzyme called papain which helps in digestion. The enzyme is similar to pepsin in its digestive action and is said to be so powerful that it can digest 200 times its own weight in protein. It assists the body in assimilating the maximum nutritional value from food to provide energy and body-building materials.

Papain in raw papaya makes up for the deficiency of gastric juice and fights excess of unhealthy mucus in the stomach, dyspepsia, and intestinal irritation. The ripe fruit, if eaten regularly corrects habitual constipation, bleeding piles, and chronic diarrhoea. The juice of the papaya seeds also assists in curing the above-mentioned ailments.

The juice, used as a cosmetic, removes freckles or brown spots due to exposure to sunlight and makes the skin smooth and delicate. A paste of papaya seeds is applied in skin diseases like those caused by ringworm. The black seeds of the papaya are highly beneficial in the treatment of cirrhosis of the liver caused by alcoholism. It is also believed that papaya seeds can also be used as an anti-inflammatory agent. A tablespoonful of its juice, combined with a hint of fresh lime juice, should be consumed once or twice daily for a month. The fresh juice of raw papaya mixed with honey can be applied over inflamed tonsils, for diphtheria and other throat disorders. It dissolves the membrane and prevents infection from spreading.

Papaya thus has a number of uses. You can munch on it as a salad, have it cooked or boiled, or just drink it in the form of a milkshake or juice.

### Sub questions

Question Number : 26 Question Id : 134007430 Question Type : MCQ Option Shuffling : No Is Question Mandatory : No Calculator : None Response Time : N.A Think Time : N.A Minimum Instruction Time : 0 Correct Marks : 1 Wrong Marks : 0

The following disease is **NOT** mentioned in the passage.

Options :

1. ✓ cancer
2. ✗ diphtheria
3. ✗ heart disease

diarrhoea

4. ✘

**Question Number : 27 Question Id : 134007431 Question Type : MCQ Option Shuffling : No Is Question Mandatory : No Calculator : None Response Time : N.A Think Time : N.A Minimum Instruction Time : 0 Correct Marks : 1 Wrong Marks : 0**

In the light of the passage, arrange the sentences in sequence.

- A. It is believed that papaya seeds can also be used as an anti-inflammatory agent.
- B. A paste of papaya seeds is applied in skin diseases like those caused by ringworm.
- C. Christopher Columbus referred to it as the 'fruit of the angels'.
- D. It dissolves the membrane and prevents infection from spreading.

**Options :**

1. ✔ C, B, A, D

2. ✘ C, A, D, B

3. ✘ C, D, A, B

4. ✘ C, A, B, D

**Question Number : 28 Question Id : 134007432 Question Type : MCQ Option Shuffling : No Is Question Mandatory : No Calculator : None Response Time : N.A Think Time : N.A Minimum Instruction Time : 0 Correct Marks : 1 Wrong Marks : 0**

It fights excess of unhealthy mucus in the stomach. Pick the opposite word for the underlined word.

**Options :**

1. ✔ dearth

2. ✘ enough

3. ✘ sufficient

4. ✘ plenty

**Question Number : 29 Question Id : 134007433 Question Type : MCQ Option Shuffling : No Is Question Mandatory : No Calculator : None Response Time : N.A Think Time : N.A Minimum Instruction Time : 0 Correct Marks : 1 Wrong Marks : 0**

According to the passage, which of the following are beneficial in the treatment of cirrhosis of the liver caused by alcoholism?

**Options :**

1. ✔ black seeds of papaya

2. ✘ white seeds of papaya

3. ✘ red seeds of papaya

4. ✘ yellow seeds of papaya

**Question Number : 30 Question Id : 134007434 Question Type : MCQ Option Shuffling : No Is Question Mandatory : No Calculator : None Response Time : N.A Think Time : N.A Minimum Instruction Time : 0 Correct Marks : 1 Wrong Marks : 0**

According to the passage, papaya juice makes the skin \_\_\_\_\_

**Options :**

1. ✘ rough and delicate

2. ✘ tender and shiny

3. ✘ beautiful and glow



4. ✓ smooth and delicate

## General Telugu

Section Id :	13400731
Section Number :	3
Section type :	Online
Mandatory or Optional :	Mandatory
Number of Questions :	10
Number of Questions to be attempted :	10
Section Marks :	10
Enable Mark as Answered Mark for Review and Clear Response :	Yes
Maximum Instruction Time :	0
Sub-Section Number :	1
Sub-Section Id :	13400735
Question Shuffling Allowed :	Yes
Is Section Default? :	null

Question Number : 31 Question Id : 134007435 Question Type : MCQ Option Shuffling : No Is Question Mandatory : No Calculator : None Response Time : N.A Think Time : N.A Minimum Instruction Time : 0 Correct Marks : 1 Wrong Marks : 0

ఆవంత్స సోమసుందర్ :

Options :

1. ✘ ప్రజా కవి
2. ✓ అభ్యుదయ కవి
3. ✘ భావ కవి
4. ✘ వచన కవి

Question Number : 32 Question Id : 134007436 Question Type : MCQ Option Shuffling : No Is Question Mandatory : No Calculator : None Response Time : N.A Think Time : N.A Minimum Instruction Time : 0 Correct Marks : 1 Wrong Marks : 0

“ఆంధ్ర శబ్ద చింతామణి” గ్రంథాన్ని రాసిన వారు

Options :

1. ✘ ఎర్రన
2. ✘ శ్రీనాథుడు
3. ✔ నన్నయ
4. ✘ తిక్కన

Question Number : 33 Question Id : 134007437 Question Type : MCQ Option Shuffling : No Is Question Mandatory : No Calculator : None Response Time : N.A Think Time : N.A Minimum Instruction Time : 0 Correct Marks : 1 Wrong Marks : 0

“పోతన” ఏ శతాబ్దం వాడు?

Options :

1. ✘ 14వ శతాబ్దం
2. ✘ 13వ శతాబ్దం
3. ✔ 15వ శతాబ్దం
4. ✘ 16వ శతాబ్దం

Question Number : 34 Question Id : 134007438 Question Type : MCQ Option Shuffling : No Is Question Mandatory : No Calculator : None Response Time : N.A Think Time : N.A Minimum Instruction Time : 0 Correct Marks : 1 Wrong Marks : 0

“జగదం” పదానికి అర్థం

Options :

1. ✔ కలహం

2. ✘ కరుణ

3. ✘ గడ్డించు

4. ✘ దుర్మార్గుడు

**Question Number : 35 Question Id : 134007439 Question Type : MCQ Option Shuffling : No Is Question Mandatory : No Calculator : None Response Time : N.A Think Time : N.A Minimum Instruction Time : 0 Correct Marks : 1 Wrong Marks : 0**

“యుద్ధం” పదానికి పర్యాయ పదాలు

**Options :**

1. ✘ సమరం, కమలం

2. ✘ కనకం, హేమం

3. ✘ రణం, కలం

4. ✔ సమరం, రణం

**Question Number : 36 Question Id : 134007440 Question Type : MCQ Option Shuffling : No Is Question Mandatory : No Calculator : None Response Time : N.A Think Time : N.A Minimum Instruction Time : 0 Correct Marks : 1 Wrong Marks : 0**

‘శృంగం’ పదానికి నానార్థాలు

**Options :**

1. ✔ బూర, కొమ్ము

2. ✘ స్నేహం, ప్రేమ

3. ✖ హారం, పక్కన

4. ✖ తిను, తాగు

Question Number : 37 Question Id : 134007441 Question Type : MCQ Option Shuffling : No Is Question Mandatory : No Calculator : None Response Time : N.A Think Time : N.A Minimum Instruction Time : 0 Correct Marks : 1 Wrong Marks : 0

నిమ్మకాయ పుల్లగా ఉంటుంది. గీత గీసిన భాగం ఏ భాషాభాగం

Options :

1. ✖ సర్వనామం

2. ✔ విశేషణం

3. ✖ నామవాచకం

4. ✖ క్రియ

Question Number : 38 Question Id : 134007442 Question Type : MCQ Option Shuffling : No Is Question Mandatory : No Calculator : None Response Time : N.A Think Time : N.A Minimum Instruction Time : 0 Correct Marks : 1 Wrong Marks : 0

రఘు, రమ \_\_\_\_\_ చిన్నవాడు. విభక్తి ప్రత్యయాన్ని గుర్తించండి

Options :

1. ✖ కి

2. ✖ కు

3. ✔ కంటే

4. ✖

Question Number : 39 Question Id : 134007443 Question Type : MCQ Option Shuffling : No Is Question Mandatory : No Calculator : None Response Time : N.A Think Time : N.A Minimum Instruction Time : 0 Correct Marks : 1 Wrong Marks : 0

రమణి రేపు తిరుపతికి వెళుతుంది. కాలాన్ని గుర్తించండి

Options :

1. ✖ భూత కాలం

2. ✖ వర్తమానకాలం

3. ✓ భవిష్యత్ కాలం

4. ✖ తద్దర్శక కాలం

Question Number : 40 Question Id : 134007444 Question Type : MCQ Option Shuffling : No Is Question Mandatory : No Calculator : None Response Time : N.A Think Time : N.A Minimum Instruction Time : 0 Correct Marks : 1 Wrong Marks : 0

“కూరగాయలు” ఏ సమాసం

Options :

1. ✖ ద్వీగు సమాసం

2. ✓ ద్వంద్వ సమాసం

3. ✖ తత్పురుష సమాసం

4. ✖

## Mathematics

Section Id :	13400732
Section Number :	4
Section type :	Online
Mandatory or Optional :	Mandatory
Number of Questions :	20
Number of Questions to be attempted :	20
Section Marks :	20
Enable Mark as Answered Mark for Review and Clear Response :	Yes
Maximum Instruction Time :	0
Sub-Section Number :	1
Sub-Section Id :	13400736
Question Shuffling Allowed :	Yes
Is Section Default? :	null

Question Number : 41 Question Id : 134007445 Question Type : MCQ Option Shuffling : No Is Question Mandatory : No Calculator : None Response Time : N.A Think Time : N.A Minimum Instruction Time : 0 Correct Marks : 1 Wrong Marks : 0

If product of  $(x^3 - 8)(x^3 + 8)$  is given by a polynomial

$P(x) = ax^6 + bx^5 + cx^4 + dx^3 + ex^2 + fx + g$  then  $P(2) =$

Options :

1. ✖ 1

2. ✔ 0

3. ✖ 2

4. ✖ 3

Question Number : 42 Question Id : 134007446 Question Type : MCQ Option Shuffling : No Is Question Mandatory : No Calculator : None Response Time : N.A Think Time : N.A Minimum Instruction Time : 0

Correct Marks : 1 Wrong Marks : 0

The solution of  $51x + 49y = 251$  and  $49x + 51y = 249$  is

Options :

1. ✘ (-3, -2)

2. ✘ (-2, 3)

3. ✔ (3, 2)

4. ✘ (2, -3)

Question Number : 43 Question Id : 134007447 Question Type : MCQ Option Shuffling : No Is Question Mandatory : No Calculator : None Response Time : N.A Think Time : N.A Minimum Instruction Time : 0 Correct Marks : 1 Wrong Marks : 0

Value of  $\log_{0.1} 0.001$  is

Options :

1. ✔ 3

2. ✘ 2

3. ✘ 4

4. ✘ 1

Question Number : 44 Question Id : 134007448 Question Type : MCQ Option Shuffling : No Is Question Mandatory : No Calculator : None Response Time : N.A Think Time : N.A Minimum Instruction Time : 0 Correct Marks : 1 Wrong Marks : 0

If the ratio of sides of two similar triangles is 9:4, then the ratio of their areas is

Options :

3:2

1. ✘

9:4

2. ✘

4:9

3. ✘

81:16

4. ✔

**Question Number : 45 Question Id : 134007449 Question Type : MCQ Option Shuffling : No Is Question Mandatory : No Calculator : None Response Time : N.A Think Time : N.A Minimum Instruction Time : 0 Correct Marks : 1 Wrong Marks : 0**

Cumulative frequencies are used to measure the

**Options :**

mean

1. ✘

range

2. ✘

mode

3. ✘

median

4. ✔

**Question Number : 46 Question Id : 134007450 Question Type : MCQ Option Shuffling : No Is Question Mandatory : No Calculator : None Response Time : N.A Think Time : N.A Minimum Instruction Time : 0 Correct Marks : 1 Wrong Marks : 0**

$$\frac{1 - \tan^2 \theta}{\cot^2 \theta - 1} =$$

**Options :**



$$\sec^2 \theta$$

1. ✘

$$\tan^2 \theta$$

2. ✔

$$\cot^2 \theta$$

3. ✘

$$\sin^2 \theta$$

4. ✘

Question Number : 47 Question Id : 134007451 Question Type : MCQ Option Shuffling : No Is Question Mandatory : No Calculator : None Response Time : N.A Think Time : N.A Minimum Instruction Time : 0 Correct Marks : 1 Wrong Marks : 0

If  $(1, 2k)$ ,  $(1, -4)$  and  $(7, -k)$  are collinear, the value of  $k$  is

Options :

2

1. ✘

1

2. ✘

-2

3. ✔

-1

4. ✘

Question Number : 48 Question Id : 134007452 Question Type : MCQ Option Shuffling : No Is Question Mandatory : No Calculator : None Response Time : N.A Think Time : N.A Minimum Instruction Time : 0 Correct Marks : 1 Wrong Marks : 0

Given  $f(z) = (z-1)(z-2)(z-3)$ . If  $f(z)$  is divided by  $z-4$ , then the remainder is

Options :

1.  6

2.  0

3.  24

4.  12

Question Number : 49 Question Id : 134007453 Question Type : MCQ Option Shuffling : No Is Question Mandatory : No Calculator : None Response Time : N.A Think Time : N.A Minimum Instruction Time : 0 Correct Marks : 1 Wrong Marks : 0

The HCF of  $3^5 \times 5^3 \times 2^4$  and  $3^3 \times 7^2 \times 2^6$  is

Options :

1.   $3^5 \times 5^3 \times 2^6$

2.   $2 \times 3 \times 5 \times 7$

3.   $3^5 \times 5^3 \times 7^2 \times 2^6$

4.   $3^3 \times 2^4$

Question Number : 50 Question Id : 134007454 Question Type : MCQ Option Shuffling : No Is Question Mandatory : No Calculator : None Response Time : N.A Think Time : N.A Minimum Instruction Time : 0 Correct Marks : 1 Wrong Marks : 0

If the 1<sup>st</sup> day of April is a Saturday, then the probability of any given day in April month is **NOT** being a Saturday is

Options :

$$\frac{1}{2}$$

1. ✘

$$\frac{5}{6}$$

2. ✔

$$\frac{13}{15}$$

3. ✘

$$\frac{1}{6}$$

4. ✘

Question Number : 51 Question Id : 134007455 Question Type : MCQ Option Shuffling : No Is Question Mandatory : No Calculator : None Response Time : N.A Think Time : N.A Minimum Instruction Time : 0 Correct Marks : 1 Wrong Marks : 0

If  $a, b, c$  are in GP and  $p, q, r$  are in AP, then  $a^{(p-q)} \times b^{(r-p)} \times c^{(q-r)} =$

Options :

$$a \times b \times c$$

1. ✘

$$p + q + r$$

2. ✘

$$0$$

3. ✘

1

4. ✓

Question Number : 52 Question Id : 134007456 Question Type : MCQ Option Shuffling : No Is Question Mandatory : No Calculator : None Response Time : N.A Think Time : N.A Minimum Instruction Time : 0 Correct Marks : 1 Wrong Marks : 0

If the ratio of sides of a triangle is  $1:\sqrt{3}:2$ , then ratio of its angles is

Options :

1:  $\sqrt{3}:\sqrt{2}$

1. ✘

2.  $1:\sqrt{2}:3$

2. ✘

3.  $1:2:3$

3. ✓

4.  $\sqrt{3}:1:2$

4. ✘

Question Number : 53 Question Id : 134007457 Question Type : MCQ Option Shuffling : No Is Question Mandatory : No Calculator : None Response Time : N.A Think Time : N.A Minimum Instruction Time : 0 Correct Marks : 1 Wrong Marks : 0

$\triangle ABC \sim \triangle DEF$  and perimeters of  $\triangle ABC$  and  $\triangle DEF$  are 36cm and 24 cm respectively. If

$EF = 4$  cm. then  $BC =$

Options :

1. 8 cm

1. ✘

2. 12 cm

2. ✘

3. ✘ 4 cm

4. ✔ 6 cm

Question Number : 54 Question Id : 134007458 Question Type : MCQ Option Shuffling : No Is Question Mandatory : No Calculator : None Response Time : N.A Think Time : N.A Minimum Instruction Time : 0 Correct Marks : 1 Wrong Marks : 0

Let set  $A = \{a, e, i, o, u\}$  and set  $B = \{a, i, u\}$ , then  $(A - B) \cap B =$

Options :

1. ✘  $\{a, e, i, o, u\}$

2. ✘  $\{a, i, u\}$

3. ✔  $\{\}$

4. ✘  $\{e, o\}$

Question Number : 55 Question Id : 134007459 Question Type : MCQ Option Shuffling : No Is Question Mandatory : No Calculator : None Response Time : N.A Think Time : N.A Minimum Instruction Time : 0 Correct Marks : 1 Wrong Marks : 0

A cone and a cylinder have bases of equal radii and of equal heights. Then, the ratio of their volumes is

Options :

1. ✔ 1 : 3

2. ✘ 1 : 2

3. ✘  $\sqrt{2} : 1$

4. ✘  $\sqrt{3} : 1$

**Question Number : 56 Question Id : 134007460 Question Type : MCQ Option Shuffling : No Is Question Mandatory : No Calculator : None Response Time : N.A Think Time : N.A Minimum Instruction Time : 0 Correct Marks : 1 Wrong Marks : 0**

The length of the tangent from a point 25cm away from the centre of a circle of radius 7cm is

Options :

1. ✘ 21cm

2. ✘ 23cm

3. ✘ 22cm

4. ✔ 24cm

**Question Number : 57 Question Id : 134007461 Question Type : MCQ Option Shuffling : No Is Question Mandatory : No Calculator : None Response Time : N.A Think Time : N.A Minimum Instruction Time : 0 Correct Marks : 1 Wrong Marks : 0**

$$\sec 55^\circ \cdot \sin 35^\circ =$$

Options :

1. ✔ 1

2. ✘ -1

3. ✖  $\infty$

4. ✖ 0

**Question Number : 58 Question Id : 134007462 Question Type : MCQ Option Shuffling : No Is Question Mandatory : No Calculator : None Response Time : N.A Think Time : N.A Minimum Instruction Time : 0 Correct Marks : 1 Wrong Marks : 0**

The probability of that the card drawn will be a king from a single deck of well shuffled cards is

Options :

1. ✖  $\frac{2}{13}$

2. ✔  $\frac{1}{13}$

3. ✖  $\frac{12}{13}$

4. ✖  $\frac{11}{13}$

**Question Number : 59 Question Id : 134007463 Question Type : MCQ Option Shuffling : No Is Question Mandatory : No Calculator : None Response Time : N.A Think Time : N.A Minimum Instruction Time : 0 Correct Marks : 1 Wrong Marks : 0**

If arithmetic mean of  $x, x+2, x+4, x+6$  and  $x+8$  is 10, then  $x$  value is

Options :

1. ✘ 4

2. ✘ 5

3. ✔ 6

4. ✘ 3

Question Number : 60 Question Id : 134007464 Question Type : MCQ Option Shuffling : No Is Question Mandatory : No Calculator : None Response Time : N.A Think Time : N.A Minimum Instruction Time : 0 Correct Marks : 1 Wrong Marks : 0

If  $\sec \theta + \tan \theta = p$  then the value of  $\sec \theta - \tan \theta$  is

Options :

1. ✔  $\frac{1}{p}$

2. ✘  $-p$

3. ✘ 1

4. ✘  $\frac{-1}{p}$

## Physical Sciences



Section Number :	5
Section type :	Online
Mandatory or Optional :	Mandatory
Number of Questions :	10
Number of Questions to be attempted :	10
Section Marks :	10
Enable Mark as Answered Mark for Review and Clear Response :	Yes
Maximum Instruction Time :	0
Sub-Section Number :	1
Sub-Section Id :	13400737
Question Shuffling Allowed :	Yes
Is Section Default? :	null

Question Number : 61 Question Id : 134007465 Question Type : MCQ Option Shuffling : No Is Question Mandatory : No Calculator : None Response Time : N.A Think Time : N.A Minimum Instruction Time : 0 Correct Marks : 1 Wrong Marks : 0

To obtain a virtual image using Concave mirror

Options :

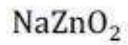
1. ✘ the object is to be placed between F and C
2. ✔ The object is to be placed between P and F
3. ✘ The object is to be placed beyond C
4. ✘ The object is to be placed at infinity

Question Number : 62 Question Id : 134007466 Question Type : MCQ Option Shuffling : No Is Question Mandatory : No Calculator : None Response Time : N.A Think Time : N.A Minimum Instruction Time : 0 Correct Marks : 1 Wrong Marks : 0

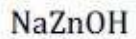
Identify the product 'X' in the chemical equation



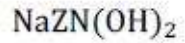
Options :



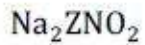
1. ✘



2. ✘



3. ✘



4. ✔

**Question Number : 63 Question Id : 134007467 Question Type : MCQ Option Shuffling : No Is Question Mandatory : No Calculator : None Response Time : N.A Think Time : N.A Minimum Instruction Time : 0 Correct Marks : 1 Wrong Marks : 0**

Salts are electrically

**Options :**

Neutral

1. ✔

Positive

2. ✘

Negative

3. ✘

Both positive and negative

4. ✘

**Question Number : 64 Question Id : 134007468 Question Type : MCQ Option Shuffling : No Is Question Mandatory : No Calculator : None Response Time : N.A Think Time : N.A Minimum Instruction Time : 0 Correct Marks : 1 Wrong Marks : 0**

The minimum focal length of eye lens for a person having Hypermetropia is

Options :

less than 2.27 cm

1. ✘

greater than 2.27 cm

2. ✔

equals to 2.5 cm

3. ✘

less than 2.5 cm

4. ✘

Question Number : 65 Question Id : 134007469 Question Type : MCQ Option Shuffling : No Is Question Mandatory : No Calculator : None Response Time : N.A Think Time : N.A Minimum Instruction Time : 0 Correct Marks : 1 Wrong Marks : 0

The maximum number of electrons that can occupy by sub-shell 'f' is

Options :

2

1. ✘

6

2. ✘

10

3. ✘

14

4. ✔

Question Number : 66 Question Id : 134007470 Question Type : MCQ Option Shuffling : No Is Question Mandatory : No Calculator : None Response Time : N.A Think Time : N.A Minimum Instruction Time : 0 Correct Marks : 1 Wrong Marks : 0

The coordination numbers of  $Na^+$ ,  $Cl^-$  in Sodium Chloride crystal are respectively

**Options :**

1. ✘ 1, 17
2. ✘ 17, 1
3. ✔ 6, 6
4. ✘ 11, 35.5

**Question Number : 67 Question Id : 134007471 Question Type : MCQ Option Shuffling : No Is Question Mandatory : No Calculator : None Response Time : N.A Think Time : N.A Minimum Instruction Time : 0 Correct Marks : 1 Wrong Marks : 0**

The process used for the concentration of Sulphide ore is

**Options :**

1. ✔ Froth Flotation
2. ✘ Calcination
3. ✘ Roasting
4. ✘ magnetic Separation

**Question Number : 68 Question Id : 134007472 Question Type : MCQ Option Shuffling : No Is Question Mandatory : No Calculator : None Response Time : N.A Think Time : N.A Minimum Instruction Time : 0 Correct Marks : 1 Wrong Marks : 0**

The formula of a compound with 5 Carbons in the homologous series of Alkanes

Options :

1. ✘  $C_5H_6$

2. ✘  $C_5H_8$

3. ✘  $C_5H_{10}$

4. ✔  $C_5H_{12}$

Question Number : 69 Question Id : 134007473 Question Type : MCQ Option Shuffling : No Is Question Mandatory : No Calculator : None Response Time : N.A Think Time : N.A Minimum Instruction Time : 0 Correct Marks : 1 Wrong Marks : 0

Which one among the following is **NOT** an application of Faraday's Law of electromagnetic induction?

Options :

1. ✘ ATM card

2. ✔ Electric Bulb

3. ✘ Induction Stove

4. ✘ Tape Recorder

Question Number : 70 Question Id : 134007474 Question Type : MCQ Option Shuffling : No Is Question Mandatory : No Calculator : None Response Time : N.A Think Time : N.A Minimum Instruction Time : 0

Correct Marks : 1 Wrong Marks : 0

The phenomenon 'hybridization of atomic orbitals' was proposed by

Options :

1. ✓ Linus Pauling

2. ✘ G. N. Lewis

3. ✘ Kossel

4. ✘ Gillespie

## Biological Sciences

Section Id :	13400734
Section Number :	6
Section type :	Online
Mandatory or Optional :	Mandatory
Number of Questions :	10
Number of Questions to be attempted :	10
Section Marks :	10
Enable Mark as Answered Mark for Review and Clear Response :	Yes
Maximum Instruction Time :	0
Sub-Section Number :	1
Sub-Section Id :	13400738
Question Shuffling Allowed :	Yes
Is Section Default? :	null

Question Number : 71 Question Id : 134007475 Question Type : MCQ Option Shuffling : No Is Question Mandatory : No Calculator : None Response Time : N.A Think Time : N.A Minimum Instruction Time : 0 Correct Marks : 1 Wrong Marks : 0

Identify the digestive hormones from the following

- A. Pepsin
- B. Trypsin
- C. Secretin
- D. Cholesystokinin
- E. Succus entericus

Options :

1. ✘ A & B only

2. ✘ B & C only

3. ✔ C & D only

4. ✘ D & E only

Question Number : 72 Question Id : 134007476 Question Type : MCQ Option Shuffling : No Is Question Mandatory : No Calculator : None Response Time : N.A Think Time : N.A Minimum Instruction Time : 0 Correct Marks : 1 Wrong Marks : 0

Deficiency of which B-complex vitamins causes anemia?

Options :

1. ✘ Riboflavin, Biotin

2. ✘ Thiamin, Niacin

3. ✘ Pantothenic acid, Riboflavin

4. ✔ Folic acid, Pyridoxine

Question Number : 73 Question Id : 134007477 Question Type : MCQ Option Shuffling : No Is Question Mandatory : No Calculator : None Response Time : N.A Think Time : N.A Minimum Instruction Time : 0 Correct Marks : 1 Wrong Marks : 0

Identify the incorrect pairs

- |                    |   |                      |
|--------------------|---|----------------------|
| A. Platyhelminthes | - | Renette Cells        |
| B. Nematoda        | - | Flame Cells          |
| C. Arthropoda      | - | Green glands         |
| D. Mollusca        | - | Water Vasular System |

Options :

A, C & D only

1. ✘

A, B & D only

2. ✔

B, C & D only

3. ✘

A, B & C only

4. ✘

Question Number : 74 Question Id : 134007478 Question Type : MCQ Option Shuffling : No Is Question Mandatory : No Calculator : None Response Time : N.A Think Time : N.A Minimum Instruction Time : 0 Correct Marks : 1 Wrong Marks : 0

What is the percentage of heterozygous progeny resulting from a monohybrid cross between two heterozygous pea plants?

Options :

25%

1. ✘

50%

2. ✔

75%

3. ✘



100%

4. ✘

**Question Number : 75 Question Id : 134007479 Question Type : MCQ Option Shuffling : No Is Question Mandatory : No Calculator : None Response Time : N.A Think Time : N.A Minimum Instruction Time : 0 Correct Marks : 1 Wrong Marks : 0**

In which of the following animal, Bucco-pharyngeal cavity helps in respiration?

**Options :**

1. ✓ Frog

2. ✘ Whale

3. ✘ Penguin

4. ✘ Dolphin

**Question Number : 76 Question Id : 134007480 Question Type : MCQ Option Shuffling : No Is Question Mandatory : No Calculator : None Response Time : N.A Think Time : N.A Minimum Instruction Time : 0 Correct Marks : 1 Wrong Marks : 0**

Identify the correct sentence

**Options :**

1. ✘ Pulmonary artery arises from upper part of left ventricle

2. ✘ Pulmonary valves are present in pulmonary veins.

3. ✘ Pulmonary vein brings deoxygenated blood from lungs to heart

Mitral valve is present on the left auriculoventricular system

4. ✓

Question Number : 77 Question Id : 134007481 Question Type : MCQ Option Shuffling : No Is Question Mandatory : No Calculator : None Response Time : N.A Think Time : N.A Minimum Instruction Time : 0 Correct Marks : 1 Wrong Marks : 0

Identify the correct pair

Gland                      Hormone Secreted

Options :

1. ✓ Pituitary - Vasopressin
2. ✘ Thyroid - Thyrotropin
3. ✘ Ovary - Follicle Stimulating Hormone
4. ✘ Adrenal - Adreno Cortico Trophic Hormone

Question Number : 78 Question Id : 134007482 Question Type : MCQ Option Shuffling : No Is Question Mandatory : No Calculator : None Response Time : N.A Think Time : N.A Minimum Instruction Time : 0 Correct Marks : 1 Wrong Marks : 0

Match the following

A	Strawberry	i	Rhizome
B	Millingtonia	ii	Radical buds
C	Colocacia	iii	Bulb
D	Ginger	iv	Stolon
		v	Corm

Options :

1. ✘ A - iv, B - iii, C - i, D - v

2. ✘ A – ii, B - iii, C - v, D - iv

3. ✔ A – iv, B - ii, C - v, D - i

4. ✘ A – iii, B - iv, C - ii, D - i

**Question Number : 79 Question Id : 134007483 Question Type : MCQ Option Shuffling : No Is Question Mandatory : No Calculator : None Response Time : N.A Think Time : N.A Minimum Instruction Time : 0 Correct Marks : 1 Wrong Marks : 0**

Identify the materials which cannot be recycled from the following

Options :

1. ✔ Wood

2. ✘ Paper

3. ✘ Glass

4. ✘ Metals

**Question Number : 80 Question Id : 134007484 Question Type : MCQ Option Shuffling : No Is Question Mandatory : No Calculator : None Response Time : N.A Think Time : N.A Minimum Instruction Time : 0 Correct Marks : 1 Wrong Marks : 0**

The process of entry of pollutants into a food chain is known as

Options :

1. ✘ Biodegradation

2. ✘ Bioremediation

3. ✘ Biomagnification

4. ✔ Bioaccumulation

## Social Studies

Section Id :	13400735
Section Number :	7
Section type :	Online
Mandatory or Optional :	Mandatory
Number of Questions :	20
Number of Questions to be attempted :	20
Section Marks :	20
Enable Mark as Answered Mark for Review and Clear Response :	Yes
Maximum Instruction Time :	0
Sub-Section Number :	1
Sub-Section Id :	13400739
Question Shuffling Allowed :	Yes
Is Section Default? :	null

Question Number : 81 Question Id : 134007485 Question Type : MCQ Option Shuffling : No Is Question Mandatory : No Calculator : None Response Time : N.A Think Time : N.A Minimum Instruction Time : 0 Correct Marks : 1 Wrong Marks : 0

'Normal Lapse Rate' means

Options :

1. ✔ decreasing of temperature as we go higher

2. ✘ increasing of temperature as we go higher

3. ✘ temperature remains constant whether we go higher or lower

increasing of atmospheric pressure as we go higher

4. ✘

**Question Number : 82 Question Id : 134007486 Question Type : MCQ Option Shuffling : No Is Question Mandatory : No Calculator : None Response Time : N.A Think Time : N.A Minimum Instruction Time : 0 Correct Marks : 1 Wrong Marks : 0**

These thick forests are found near the equator and close to the tropics:

**Options :**

1. ✔ Tropical Evergreen Forests

2. ✘ Temperate Evergreen Forests

3. ✘ Tropical Deciduous Forests

4. ✘ Temperate Deciduous Forests

**Question Number : 83 Question Id : 134007487 Question Type : MCQ Option Shuffling : No Is Question Mandatory : No Calculator : None Response Time : N.A Think Time : N.A Minimum Instruction Time : 0 Correct Marks : 1 Wrong Marks : 0**

Among the following, identify the child rights

- A) Right to live with parents as far as possible
- B) Right to get protection from violence and harmful incidents
- C) Right to have good health and medical care
- D) Right to follow the religion of the state

Choose the correct answer

**Options :**

1. ✘ A & B only

2. ✓ A, B & C only

3. ✘ B, C & D only

4. ✘ A, C & D only

**Question Number : 84 Question Id : 134007488 Question Type : MCQ Option Shuffling : No Is Question Mandatory : No Calculator : None Response Time : N.A Think Time : N.A Minimum Instruction Time : 0 Correct Marks : 1 Wrong Marks : 0**

This form of Government requires respect for law and minority opinion

**Options :**

1. ✘ Dictatorial form of Government

2. ✘ Monarchical form of Government

3. ✓ Democratic form of Government

4. ✘ Feudalistic form of government

**Question Number : 85 Question Id : 134007489 Question Type : MCQ Option Shuffling : No Is Question Mandatory : No Calculator : None Response Time : N.A Think Time : N.A Minimum Instruction Time : 0 Correct Marks : 1 Wrong Marks : 0**

The treaty that gave Alsace and Lorraine to Germany

**Options :**

1. ✘ The treaty of Paris

The Treaty of Versailles

2. ✘

The Treaty of Trianon

3. ✘

The Treaty of Frankfurt

4. ✔

**Question Number : 86 Question Id : 134007490 Question Type : MCQ Option Shuffling : No Is Question Mandatory : No Calculator : None Response Time : N.A Think Time : N.A Minimum Instruction Time : 0 Correct Marks : 1 Wrong Marks : 0**

As per the French Constitution, these rights were considered as 'natural and inalienable' rights

- A) Right to life
- B) Right to freedom of Speech
- C) Right to freedom of opinion
- D) Right to equality before law

Choose the correct answer

**Options :**

A & B only

1. ✘

C & D only

2. ✘

A, B & D only

3. ✘

A, B, C & D

4. ✔

**Question Number : 87 Question Id : 134007491 Question Type : MCQ Option Shuffling : No Is Question Mandatory : No Calculator : None Response Time : N.A Think Time : N.A Minimum Instruction Time : 0 Correct Marks : 1 Wrong Marks : 0**

Who are the people affected by rising prices in the country ?

**Options :**

1. ✘ People working in central and state Government offices
2. ✘ People doing business activities
3. ✘ People providing services such as dry cleaners, barbers
4. ✔ the agricultural labourers and construction workers

**Question Number : 88 Question Id : 134007492 Question Type : MCQ Option Shuffling : No Is Question Mandatory : No Calculator : None Response Time : N.A Think Time : N.A Minimum Instruction Time : 0 Correct Marks : 1 Wrong Marks : 0**

Besides Reserve Bank of India, this organisation facilitates formal credit organisations in rural India

**Options :**

1. ✘ Regional Rural Banks
2. ✘ Mudra Agriculture and Skill Development Multi-State Cooperative Society
3. ✘ State Bank of India
4. ✔ NABARD

**Question Number : 89 Question Id : 134007493 Question Type : MCQ Option Shuffling : No Is Question Mandatory : No Calculator : None Response Time : N.A Think Time : N.A Minimum Instruction Time : 0 Correct Marks : 1 Wrong Marks : 0**



During freedom struggle, Mahatma Gandhi asked the Indian people to observe 6<sup>th</sup> April, 1919 as a

**Options :**

1. ✘ Day of Mourning
2. ✔ Day of Humiliation and Prayer
3. ✘ Day of Purna Swaraj
4. ✘ Direct Action Day

**Question Number : 90 Question Id : 134007494 Question Type : MCQ Option Shuffling : No Is Question Mandatory : No Calculator : None Response Time : N.A Think Time : N.A Minimum Instruction Time : 0 Correct Marks : 1 Wrong Marks : 0**

The two states with maximum number of Loksabha Seats in India are:

**Options :**

1. ✔ Uttar Pradesh & Maharashtra
2. ✘ Maharashtra & West Bengal
3. ✘ Uttar Pradesh & Bihar
4. ✘ Bihar & West Bengal

**Question Number : 91 Question Id : 134007495 Question Type : MCQ Option Shuffling : No Is Question Mandatory : No Calculator : None Response Time : N.A Think Time : N.A Minimum Instruction Time : 0 Correct Marks : 1 Wrong Marks : 0**

The Ocean Currents are

**Options :**

the rise and fall of Ocean water on the surface of the ocean

1. ✘

the rhythmic rise and fall in the level of the water in the ocean

2. ✘

the stream which flow constantly in a definite direction on the surface of the ocean

3. ✔

the winds that blow from land to sea

4. ✘

**Question Number : 92 Question Id : 134007496 Question Type : MCQ Option Shuffling : No Is Question Mandatory : No Calculator : None Response Time : N.A Think Time : N.A Minimum Instruction Time : 0 Correct Marks : 1 Wrong Marks : 0**

The criminal case among the following is

**Options :**

breach of rent agreement

1. ✘

taking dowry

2. ✔

breach of marriage agreement

3. ✘

causing damage to property

4. ✘

**Question Number : 93 Question Id : 134007497 Question Type : MCQ Option Shuffling : No Is Question Mandatory : No Calculator : None Response Time : N.A Think Time : N.A Minimum Instruction Time : 0 Correct Marks : 1 Wrong Marks : 0**

Among the following, the provision of the RTE Act, 2009 is

**Options :**

Children can continue in the Elementary school, even after 14 years for the completion of Higher studies

1. ✘

Board Examinations shall be conducted to the children till the completion of elementary education

2. ✘

the child shall be retained in the same class for failing in the examinations

3. ✘

No child shall be subjected to physical punishment or mental harassment

4. ✔

**Question Number : 94 Question Id : 134007498 Question Type : MCQ Option Shuffling : No Is Question Mandatory : No Calculator : None Response Time : N.A Think Time : N.A Minimum Instruction Time : 0 Correct Marks : 1 Wrong Marks : 0**

Among the following, the provisions of the forests Rights Act,2006, are

(A) Protection, regeneration or conservation of any community forest resources

(B) rights of settlement and conversion of all forest habitation

(C) right to hold and live in the forest land

(D) right to cut the valuable trees and marketing them

Choose the correct answer

**Options :**

A & D only

1. ✘

B & C only

2. ✘

C & D only

3. ✘

A, B & C only

4. ✔

**Question Number : 95 Question Id : 134007499 Question Type : MCQ Option Shuffling : No Is Question Mandatory : No Calculator : None Response Time : N.A Think Time : N.A Minimum Instruction Time : 0 Correct Marks : 1 Wrong Marks : 0**

Among the following, the true statement regarding Basic Saving Bank Deposit Account is

**Options :**

It can have Zero or very low minimum balance

1. ✔

There are age and income restrictions for opening the account

2. ✘

maximum of 10 withdrawals in a month is allowed

3. ✘

there is no cheque facility

4. ✘

**Question Number : 96 Question Id : 134007500 Question Type : MCQ Option Shuffling : No Is Question Mandatory : No Calculator : None Response Time : N.A Think Time : N.A Minimum Instruction Time : 0 Correct Marks : 1 Wrong Marks : 0**

The desert located in the south-western part of Africa is known as

**Options :**

Atacama Desert

1. ✘

Arabian Desert

2. ✘

Gobi Desert

3. ✘

Kalahari Desert

4. ✔

**Question Number : 97 Question Id : 134007501 Question Type : MCQ Option Shuffling : No Is Question Mandatory : No Calculator : None Response Time : N.A Think Time : N.A Minimum Instruction Time : 0 Correct Marks : 1 Wrong Marks : 0**

The responsibility of protecting the people against any violation of their fundamental rights is in the hands of

**Options :**

Parliament

1. ✘

President

2. ✘

Government

3. ✔

Prime Minister

4. ✘

**Question Number : 98 Question Id : 134007502 Question Type : MCQ Option Shuffling : No Is Question Mandatory : No Calculator : None Response Time : N.A Think Time : N.A Minimum Instruction Time : 0 Correct Marks : 1 Wrong Marks : 0**

Shimla Agreement was signed between

Options :

Zulfikar Ali Butto and Lal Bahadur Shastri

1. ✘

Ayub Khan and Indira Gandhi

2. ✘

Zulfikar Ali Butto and Rajiv Gandhi

3. ✘

Zulfikar Ali Butto and Indira Gandhi

4. ✔

**Question Number : 99 Question Id : 134007503 Question Type : MCQ Option Shuffling : No Is Question Mandatory : No Calculator : None Response Time : N.A Think Time : N.A Minimum Instruction Time : 0 Correct Marks : 1 Wrong Marks : 0**

As per this article of the Indian Constitution, the Election Commission utilises the services of the Central and State Government employees with the permission of the President of India and the Governors of the states

Options :

Art. 324 (6)

1. ✔

Art. 329 (1)

2. ✘

Art. 328

3. ✘

Art. 325

4. ✘

**Question Number : 100 Question Id : 134007504 Question Type : MCQ Option Shuffling : No Is Question Mandatory : No Calculator : None Response Time : N.A Think Time : N.A Minimum Instruction Time : 0 Correct Marks : 1 Wrong Marks : 0**

The teachings of Buddha and his followers have been compiled in

- (A) Sutta Pitaka
- (B) Abhidamma Pitaka
- (C) Vinaya Pitaka
- (D) Gnana Pitaka

Choose the correct answer

**Options :**

A, C & D only

1. ✘

A, B & C only

2. ✔

A, B, C & D only

3. ✘

A & B only

4. ✘